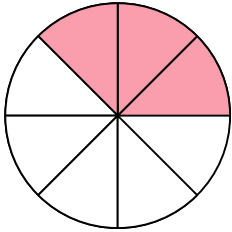


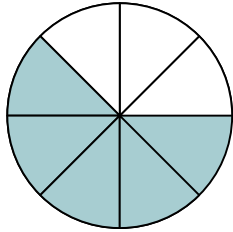
Name: _____

FRACTIONS

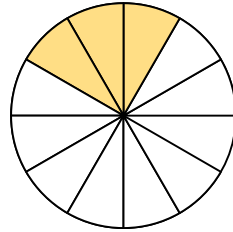
Write the fractions that the colored sections represent for each shape.



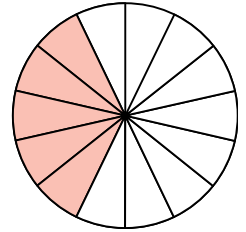
$$\frac{3}{8}$$



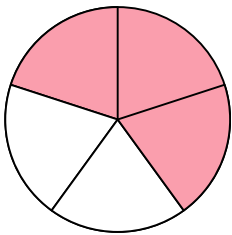
$$\frac{\quad}{\quad}$$



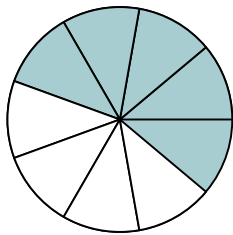
$$\frac{\quad}{\quad}$$



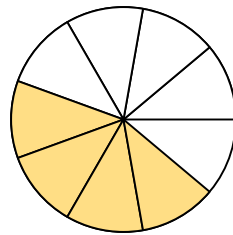
$$\frac{\quad}{\quad}$$



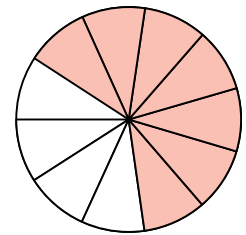
$$\frac{\quad}{\quad}$$



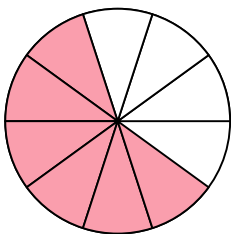
$$\frac{\quad}{\quad}$$



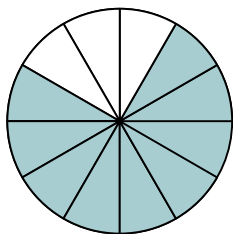
$$\frac{\quad}{\quad}$$



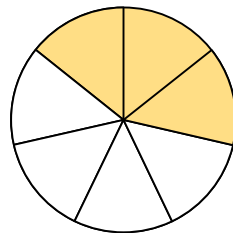
$$\frac{\quad}{\quad}$$



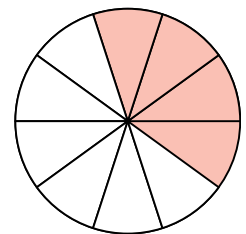
$$\frac{\quad}{\quad}$$



$$\frac{\quad}{\quad}$$



$$\frac{\quad}{\quad}$$



$$\frac{\quad}{\quad}$$